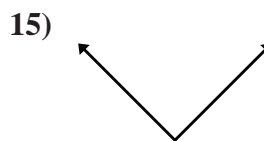
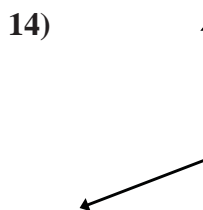
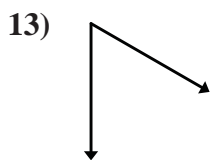
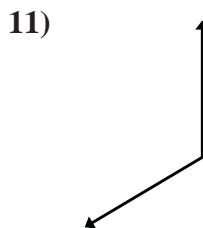
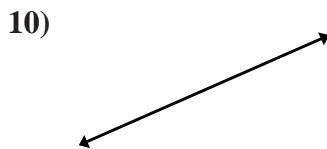
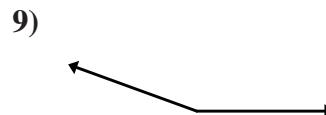
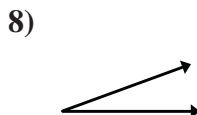

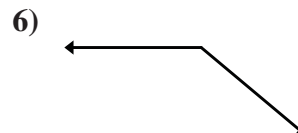
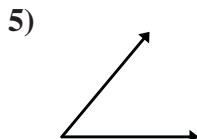
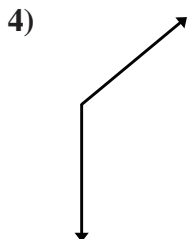
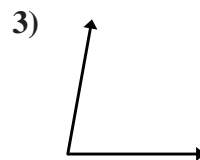
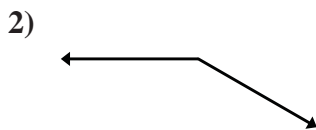
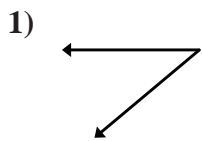




Determine if the angle shown is acute, obtuse, right or straight.

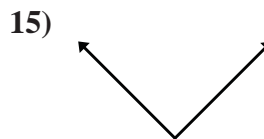
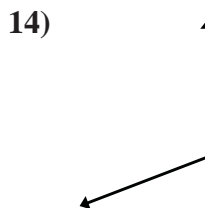
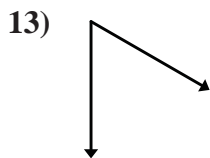
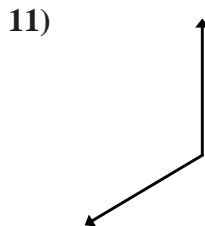

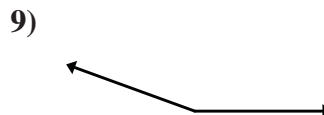
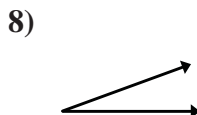

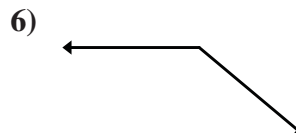
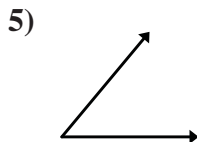
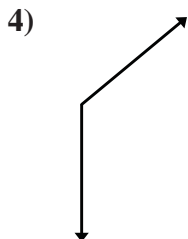
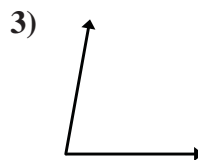
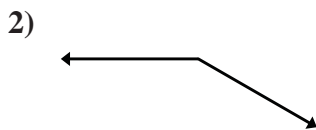
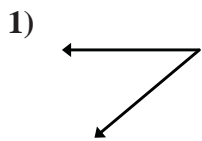
Answers



1. _____
2. _____
3. _____
4. _____
5. _____
6. _____
7. _____
8. _____
9. _____
10. _____
11. _____
12. _____
13. _____
14. _____
15. _____



Determine if the angle shown is acute, obtuse, right or straight.



Answers

1. Acute

2. Obtuse

3. Acute

4. Obtuse

5. Acute

6. Obtuse

7. Straight

8. Acute

9. Obtuse

10. Straight

11. Obtuse

12. Right

13. Acute

14. Obtuse

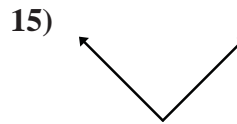
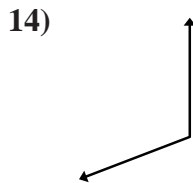
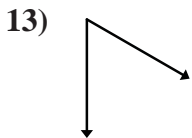
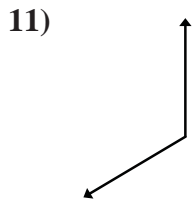
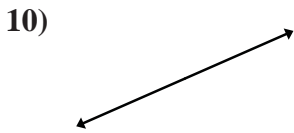
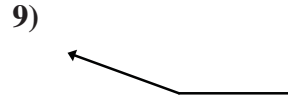
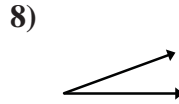

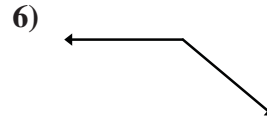
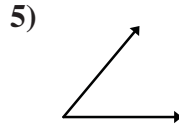
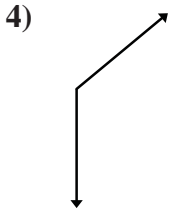
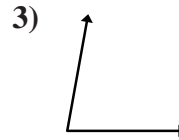
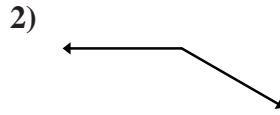
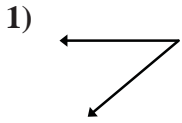
15. Right



Determine if the angle shown is acute, obtuse, right or straight.

Answers

Right Angles Angles that are exactly 90°	Acute Angles Angles that are less than 90°	Obtuse Angles Angles that are more than 90°	Straight Lines Lines without a bend.



1. _____
2. _____
3. _____
4. _____
5. _____
6. _____
7. _____
8. _____
9. _____
10. _____
11. _____
12. _____
13. _____
14. _____
15. _____