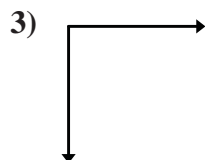
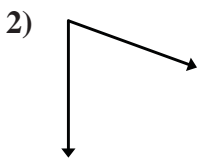
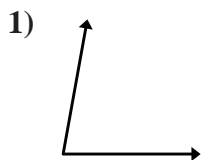




Determine if the angle shown is acute, obtuse, right or straight.

Answers

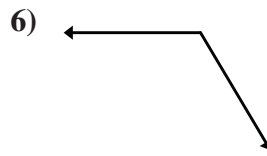
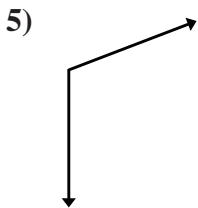
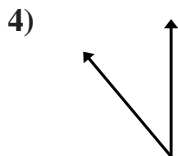


1. _____

2. _____

3. _____

4. _____

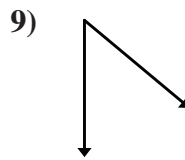
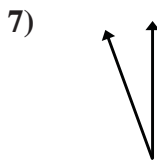


5. _____

6. _____

7. _____

8. _____

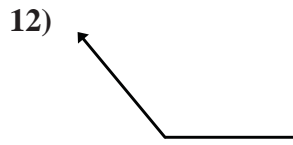
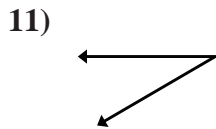
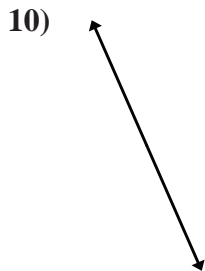


9. _____

10. _____

11. _____

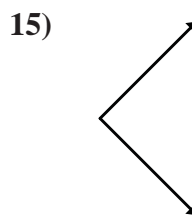
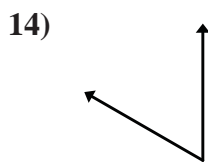
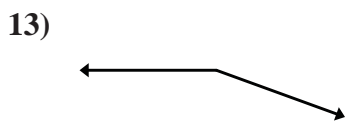
12. _____



13. _____

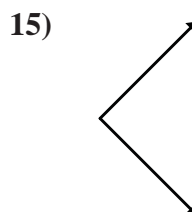
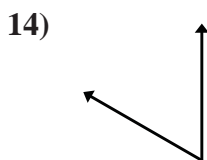
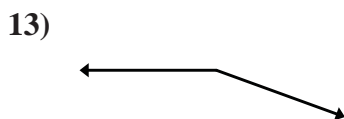
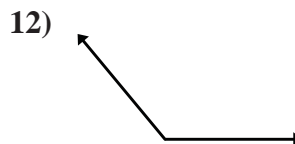
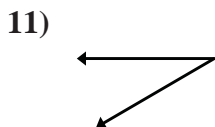
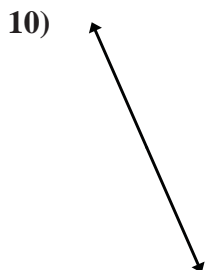
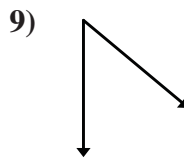
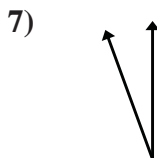
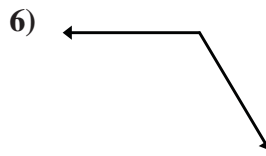
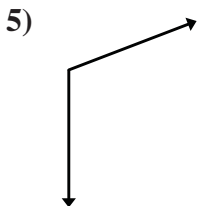
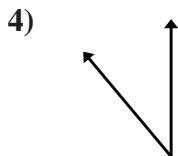
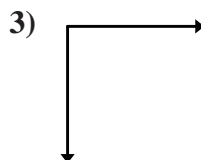
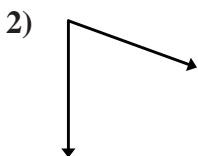
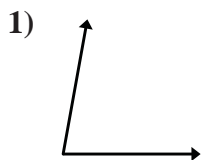
14. _____

15. _____





Determine if the angle shown is acute, obtuse, right or straight.



Answers

1. **Acute**

2. **Acute**

3. **Right**

4. **Acute**

5. **Obtuse**

6. **Obtuse**

7. **Acute**

8. **Acute**

9. **Acute**

10. **Straight**

11. **Acute**

12. **Obtuse**

13. **Obtuse**

14. **Acute**

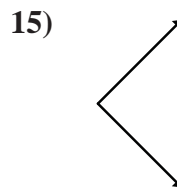
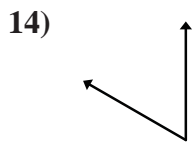
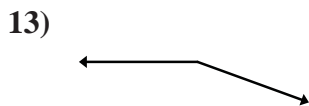
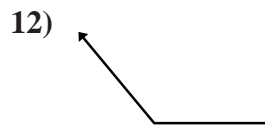
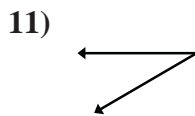
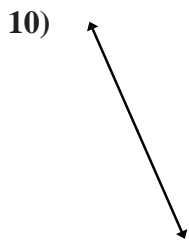
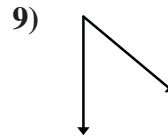
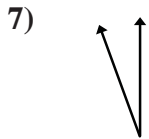
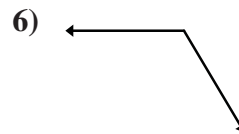
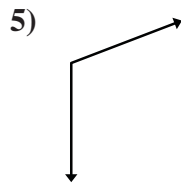
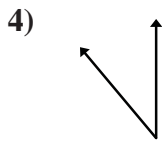
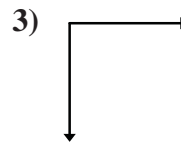
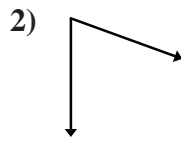
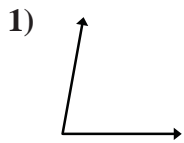
15. **Right**



Determine if the angle shown is acute, obtuse, right or straight.

Answers

Right Angles Angles that are exactly 90°	Acute Angles Angles that are less than 90°	Obtuse Angles Angles that are more than 90°	Straight Lines Lines without a bend.



1. _____
2. _____
3. _____
4. _____
5. _____
6. _____
7. _____
8. _____
9. _____
10. _____
11. _____
12. _____
13. _____
14. _____
15. _____