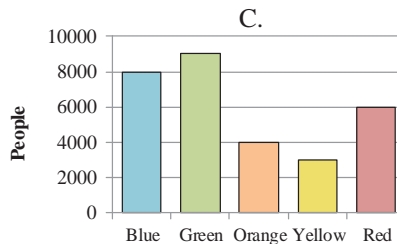
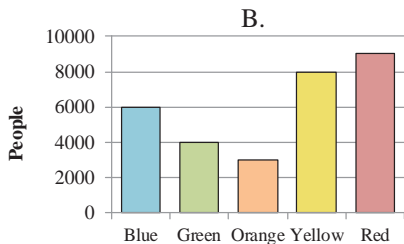
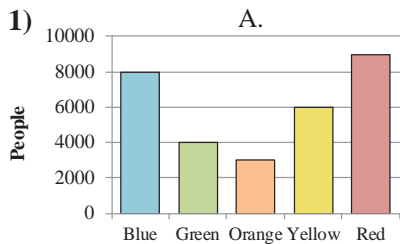




Determine which letter best represents the information in the table.

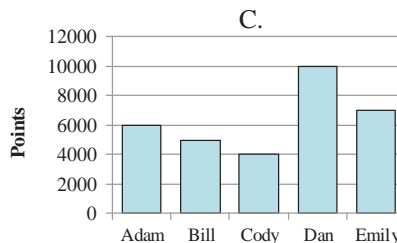
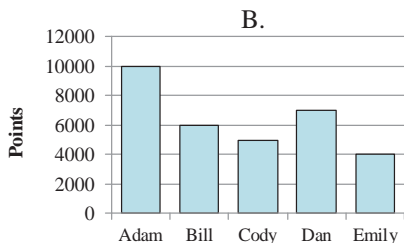
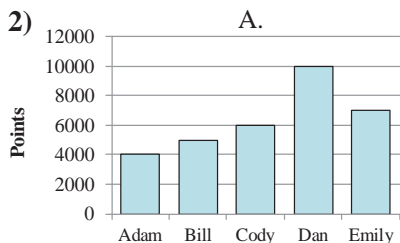
**Answers**

Color	Blue	Green	Orange	Yellow	Red
People	8,000	4,000	3,000	6,000	9,000

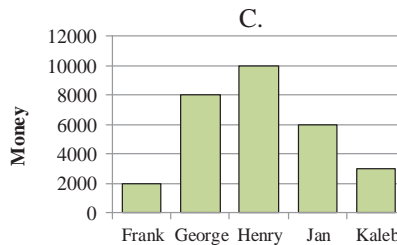
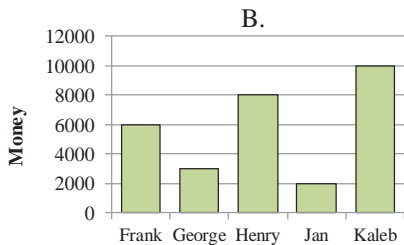
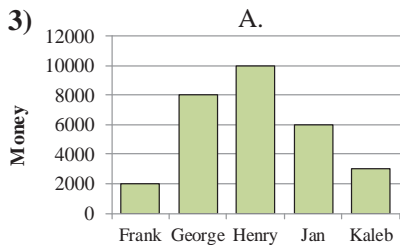


1. \_\_\_\_\_
2. \_\_\_\_\_
3. \_\_\_\_\_
4. \_\_\_\_\_

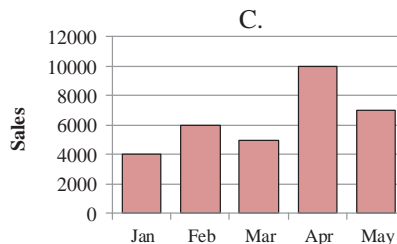
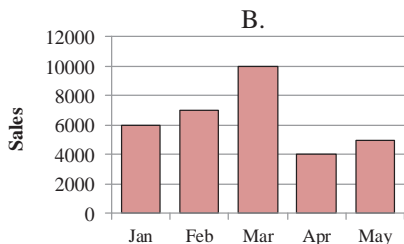
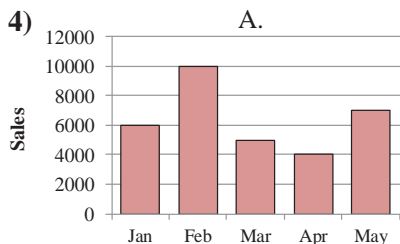
Name	Adam	Bill	Cody	Dan	Emily
Points	6,000	5,000	4,000	10,000	7,000



Name	Frank	George	Henry	Jan	Kaleb
Money Earned	6,000	3,000	8,000	2,000	10,000



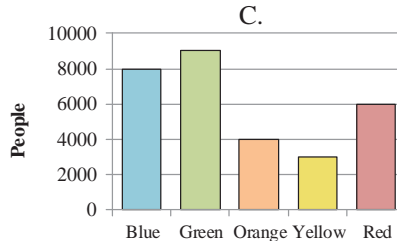
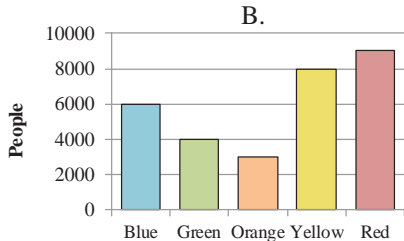
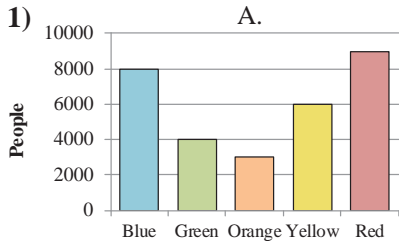
Month	Jan	Feb	Mar	Apr	May
Sales	6,000	10,000	5,000	4,000	7,000





Determine which letter best represents the information in the table.

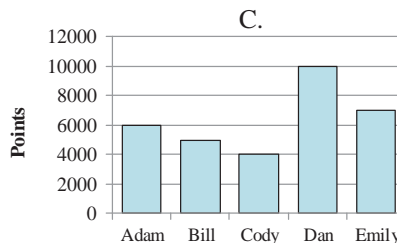
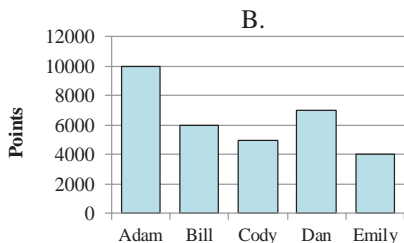
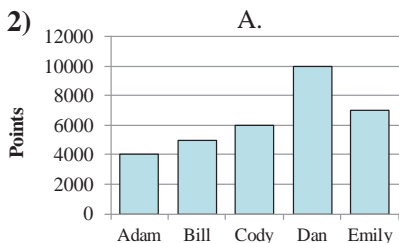
Color	Blue	Green	Orange	Yellow	Red
People	8,000	4,000	3,000	6,000	9,000



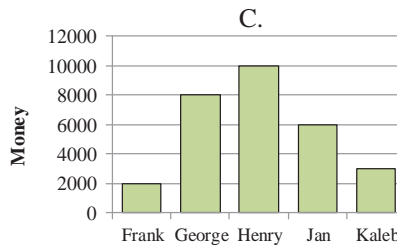
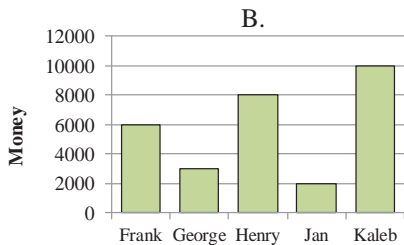
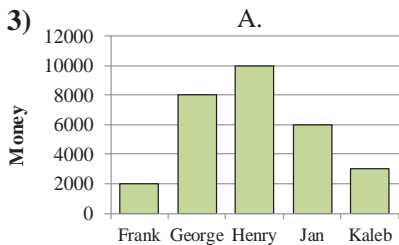
**Answers**

1. **A**
2. **C**
3. **B**
4. **A**

Name	Adam	Bill	Cody	Dan	Emily
Points	6,000	5,000	4,000	10,000	7,000



Name	Frank	George	Henry	Jan	Kaleb
Money Earned	6,000	3,000	8,000	2,000	10,000



Month	Jan	Feb	Mar	Apr	May
Sales	6,000	10,000	5,000	4,000	7,000

